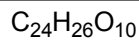

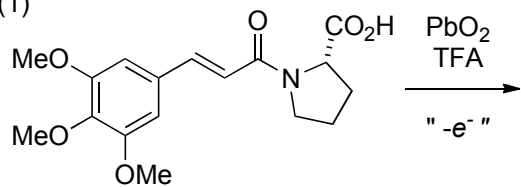


Mechanism Club (9/20/11)

Suggest the most possible products **and** propose the mechanisms for the following transformations

(1)



(2)

